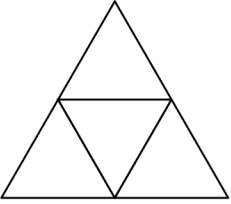
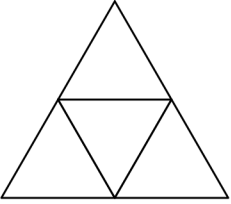
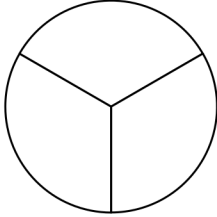
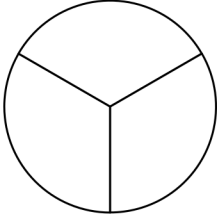
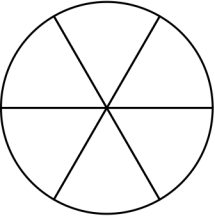
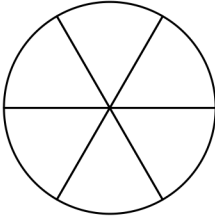
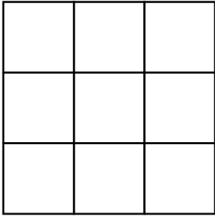
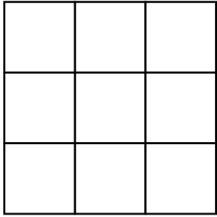
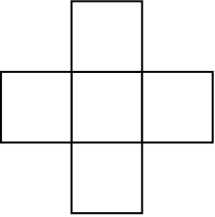
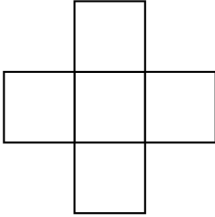
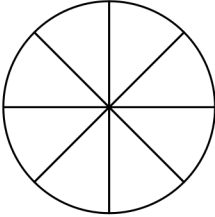
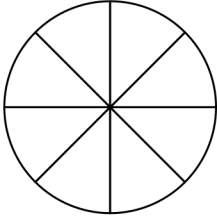
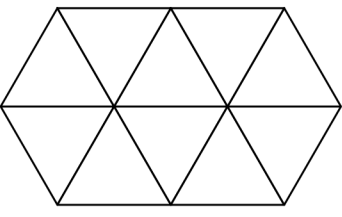
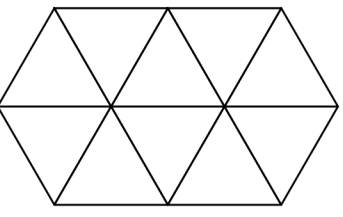
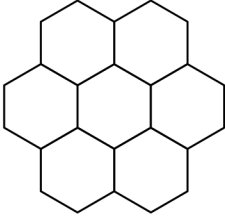
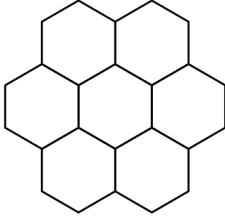
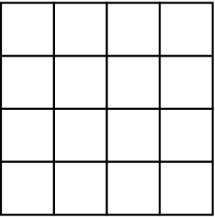
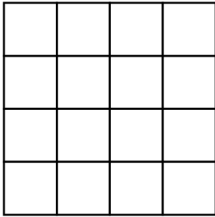
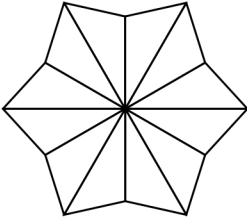
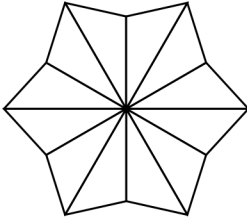


Name: _____

Date: _____

Comparing fractions [2]

Color the indicated parts of the figures to show the fractions. Compare fractions by putting the sign $>$, $<$ or $=$.

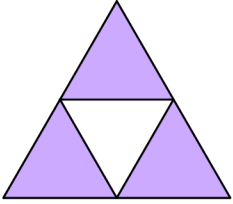
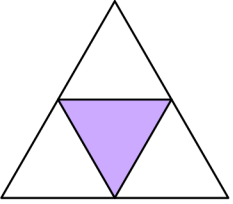
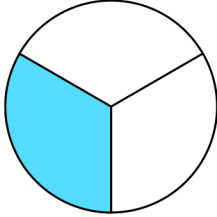
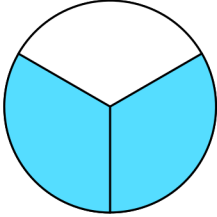
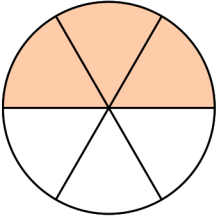
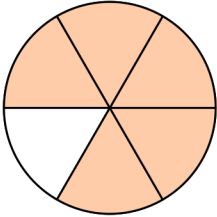
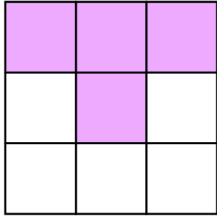

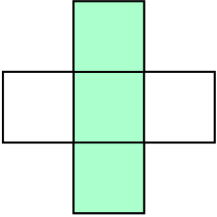
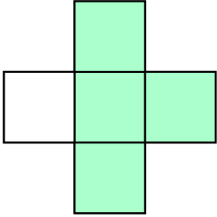
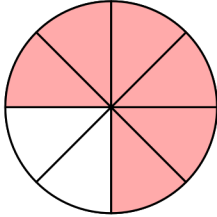
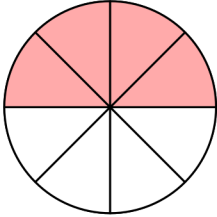
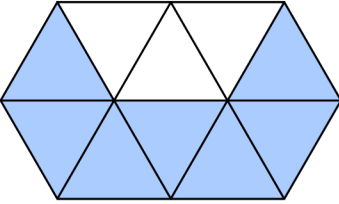
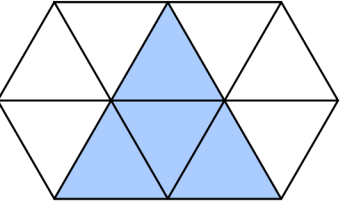
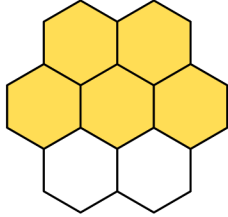
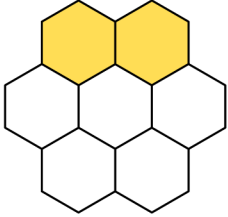
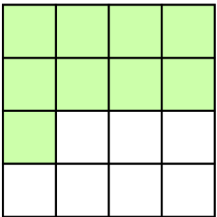
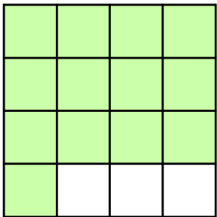
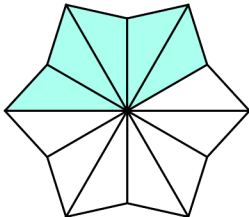
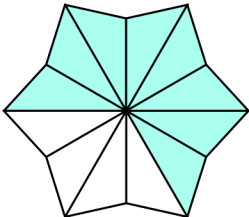
 $\frac{3}{4}$ <input type="checkbox"/>  $\frac{1}{4}$	 $\frac{1}{3}$ <input type="checkbox"/>  $\frac{2}{3}$
 $\frac{3}{6}$ <input type="checkbox"/>  $\frac{5}{6}$	 $\frac{4}{9}$ <input type="checkbox"/>  $\frac{7}{9}$
 $\frac{3}{5}$ <input type="checkbox"/>  $\frac{4}{5}$	 $\frac{6}{8}$ <input type="checkbox"/>  $\frac{4}{8}$
 $\frac{7}{10}$ <input type="checkbox"/>  $\frac{4}{10}$	 $\frac{5}{7}$ <input type="checkbox"/>  $\frac{2}{7}$
 $\frac{9}{16}$ <input type="checkbox"/>  $\frac{13}{16}$	 $\frac{5}{12}$ <input type="checkbox"/>  $\frac{8}{12}$

Name: _____

Date: _____

Comparing fractions [2]

Color the indicated parts of the figures to show the fractions. Compare fractions by putting the sign $>$, $<$ or $=$.

 $\frac{3}{4}$	$>$	 $\frac{1}{4}$	 $\frac{1}{3}$	$<$	 $\frac{2}{3}$
 $\frac{3}{6}$	$<$	 $\frac{5}{6}$	 $\frac{4}{9}$	$<$	 $\frac{7}{9}$
 $\frac{3}{5}$	$<$	 $\frac{4}{5}$	 $\frac{6}{8}$	$>$	 $\frac{4}{8}$
 $\frac{7}{10}$	$>$	 $\frac{4}{10}$	 $\frac{5}{7}$	$>$	 $\frac{2}{7}$
 $\frac{9}{16}$	$<$	 $\frac{13}{16}$	 $\frac{5}{12}$	$<$	 $\frac{8}{12}$