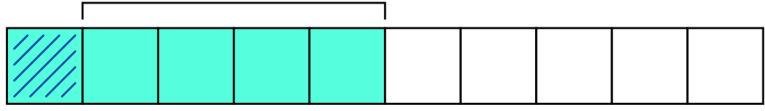



Subtraction to 10

1. Complete according to the diagram.


$5 - \square = 1$



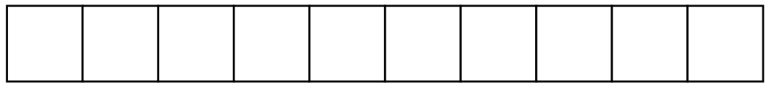
$4 - \square = 3$



$6 - \square = 2$



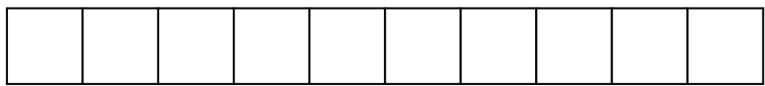
$7 - \square = 4$



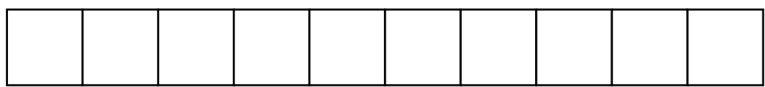
$10 - \square = 5$




$8 - \square = 7$



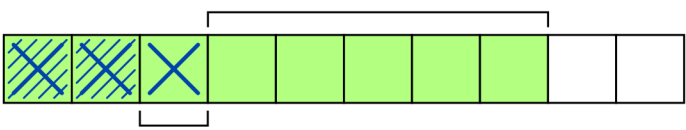
$10 - \square = 6$



$9 - \square = 9$



2. Complete the graphs.



$8 - \square = \square$

$8 - \square = \square$



$8 - \square = \square$

$8 - \square - \square = 2 = 8 - \square$

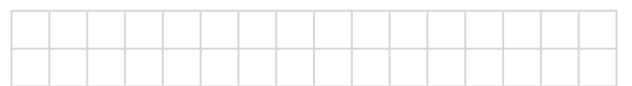


$10 - \square = \square$

$10 - \square = \square$



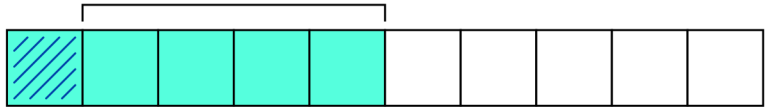
$10 - \square = \square$




Subtraction to 10

1. Complete according to the diagram.

$$5 - 4 = 1$$



$$4 - 1 = 3$$



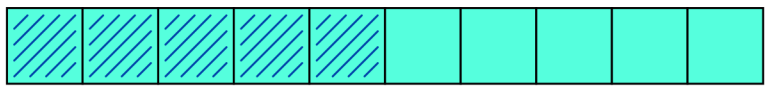
$$6 - 4 = 2$$



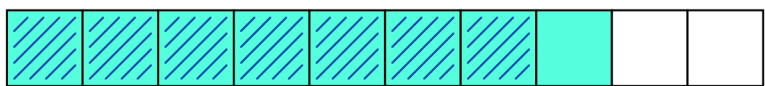
$$7 - 3 = 4$$



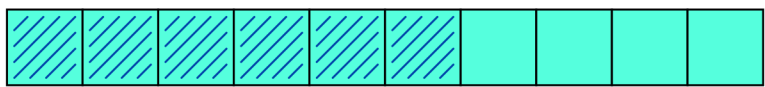
$$10 - 5 = 5$$



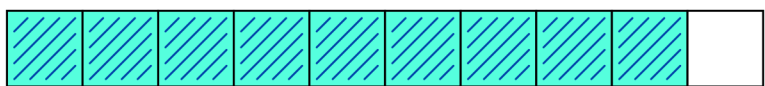
$$8 - 1 = 7$$



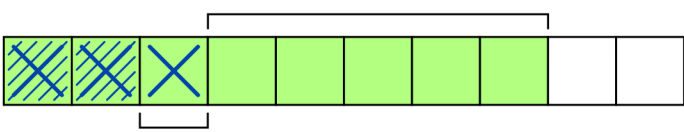
$$10 - 4 = 6$$



$$9 - 0 = 9$$



2. Complete the graphs.



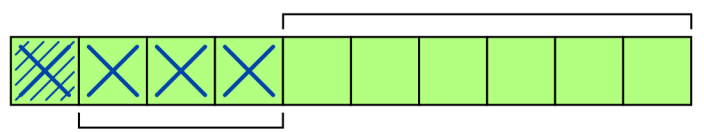
$$-5$$

$$-1$$



$$-6$$

$$8 - 5 - 1 = 2 = 8 - 6$$



$$-6$$

$$-3$$



$$-9$$

$$10 - 6 - 3 = 1 = 10 - 9$$