



# Subtraction to 10

1. Complete according to the diagram.


$4 - 2 =$



$3 - 1 =$



$6 - 3 =$



$7 - 3 =$



$10 - 4 =$



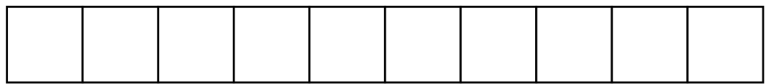
$9 - 8 =$



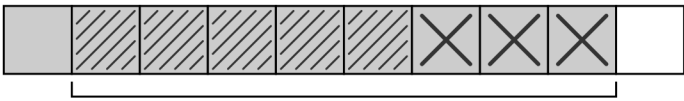
$8 - 3 =$



$5 - 0 =$

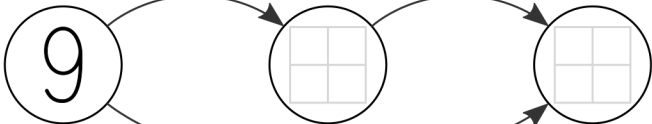


2. Complete the graphs.



-3

-5



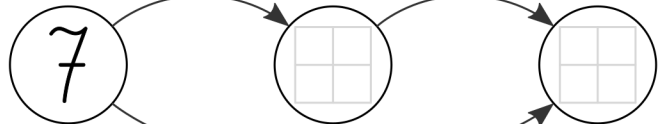
$-$

$9 - 3 - 5 = \square = 9 - \square$

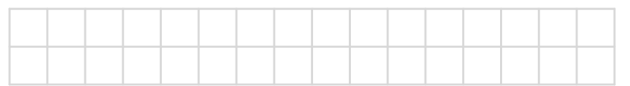


-5

-2




$-$




# Subtraction to 10

1. Complete according to the diagram.

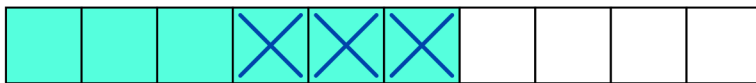
$4 - 2 = 2$



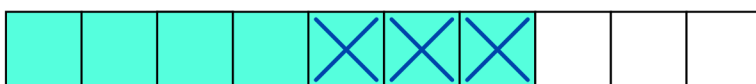
$3 - 1 = 2$



$6 - 3 = 3$



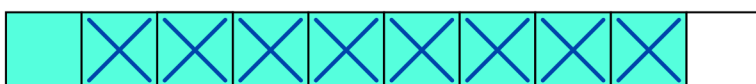
$7 - 3 = 4$



$10 - 4 = 6$



$9 - 8 = 1$



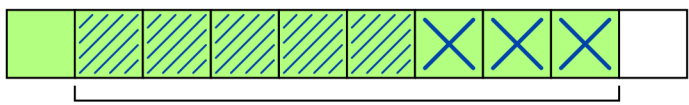
$8 - 3 = 5$



$5 - 0 = 5$



2. Complete the graphs.



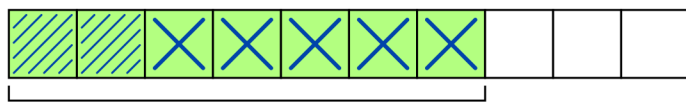
-3

-5



-8

$9 - 3 - 5 = 1 = 9 - 8$



-5

-2



-7

$7 - 5 - 2 = 0 = 7 - 7$